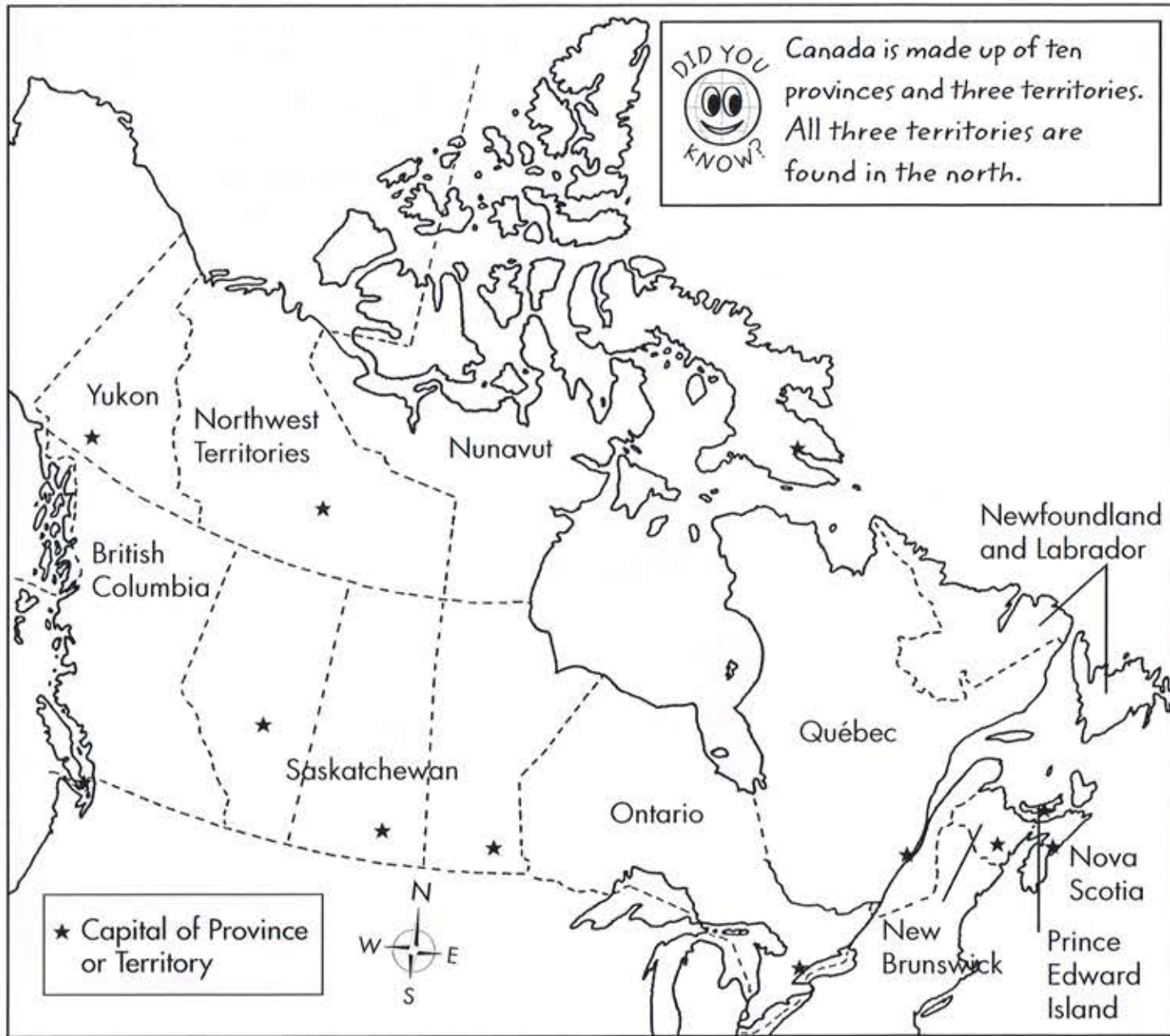


# CANADA'S PROVINCES AND TERRITORIES



1. Canada's largest **province** is \_\_\_\_\_.
2. The smallest and most western **territory** is \_\_\_\_\_.
3. British Columbia is the most **northern** / **western** province.
4. **Alberta** borders Saskatchewan on the **west**. **Manitoba** borders Saskatchewan on the **east**. Put the names of these two missing provinces on the map.
5. Which province is larger, **Nova Scotia** or **Manitoba**? \_\_\_\_\_.
6. Colour the province or territory where you live.  
I live in \_\_\_\_\_.

# IDENTIFYING THE PROVINCES AND TERRITORIES

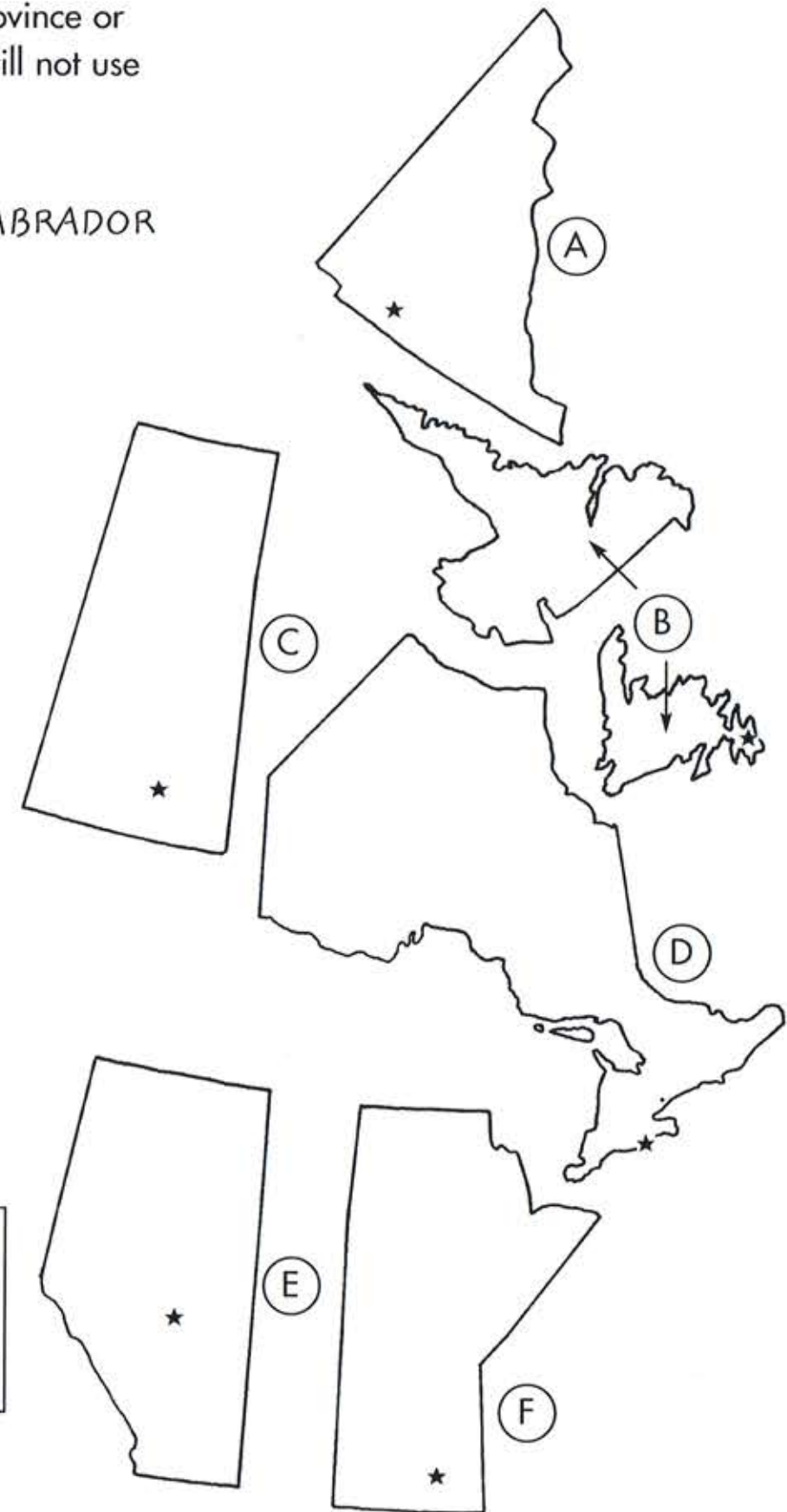
1. Connect the name of the province or territory to its outline. You will not use two of the names below.

YUKON  
 NEWFOUNDLAND AND LABRADOR  
 BRITISH COLUMBIA  
 ALBERTA  
 SASKATCHEWAN  
 MANITOBA  
 ONTARIO  
 QUÉBEC

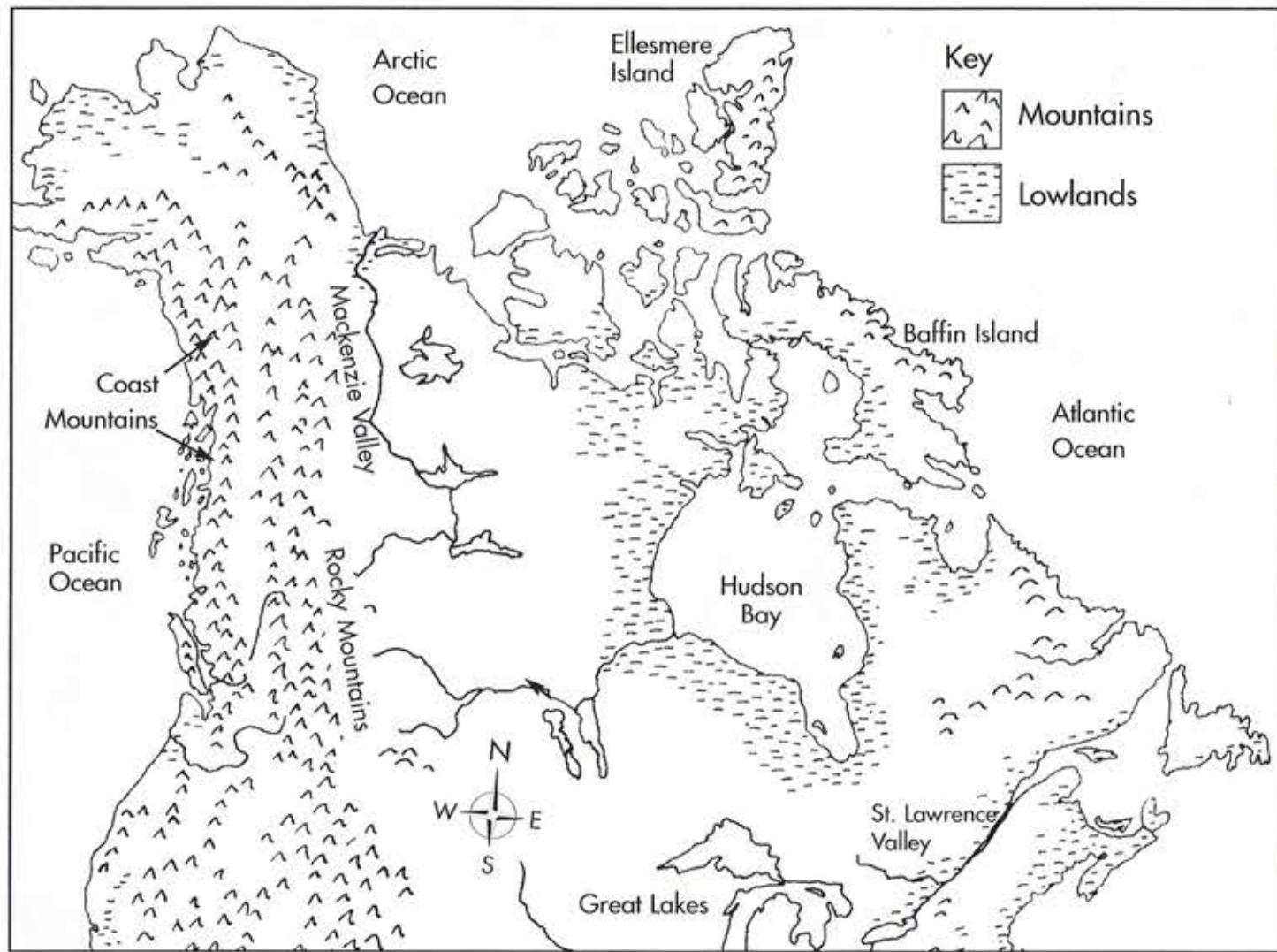
2. Match each capital to its province. Use a map of Canada for help.

EDMONTON  
 REGINA  
 WINNIPEG  
 TORONTO  
 ST. JOHN'S

**BONUS!** Which province has the same name as its capital?  
 \_\_\_\_\_



# CANADA'S LANDFORMS AND WATER BODIES



Cut out each box below the dotted lines. Paste the correct box at the end of each sentence. Use the above map for help.

1. Canada's largest island is .
2. Canada's highest landforms are the .
3. Canada's longest river is the .
4. Canada's largest inland body of salt water is .
5. Canada's most northern ocean is the .

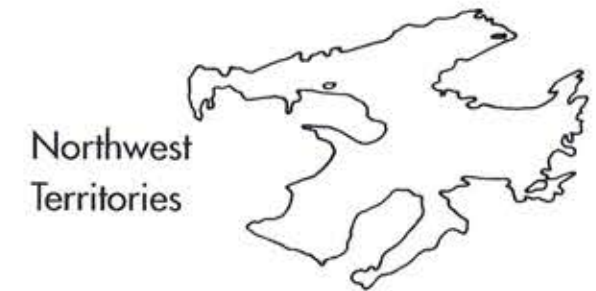


# SHAPES ON A MAP

On a map of Canada, find two lakes, two islands and two bays that match the shapes below. Use the **word hints** for help. Put the name below its shape.



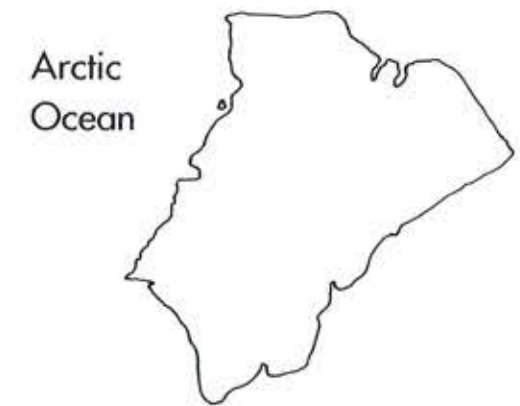
1. LAKE E \_ \_ E



2. \_ \_ EA \_ \_ EA \_  
LAKE



3. \_ AN \_ \_ \_ \_ \_  
ISLAND



4. \_ AN \_ \_ IS \_ \_ \_ \_



5. B \_ \_ OF FUN \_ \_



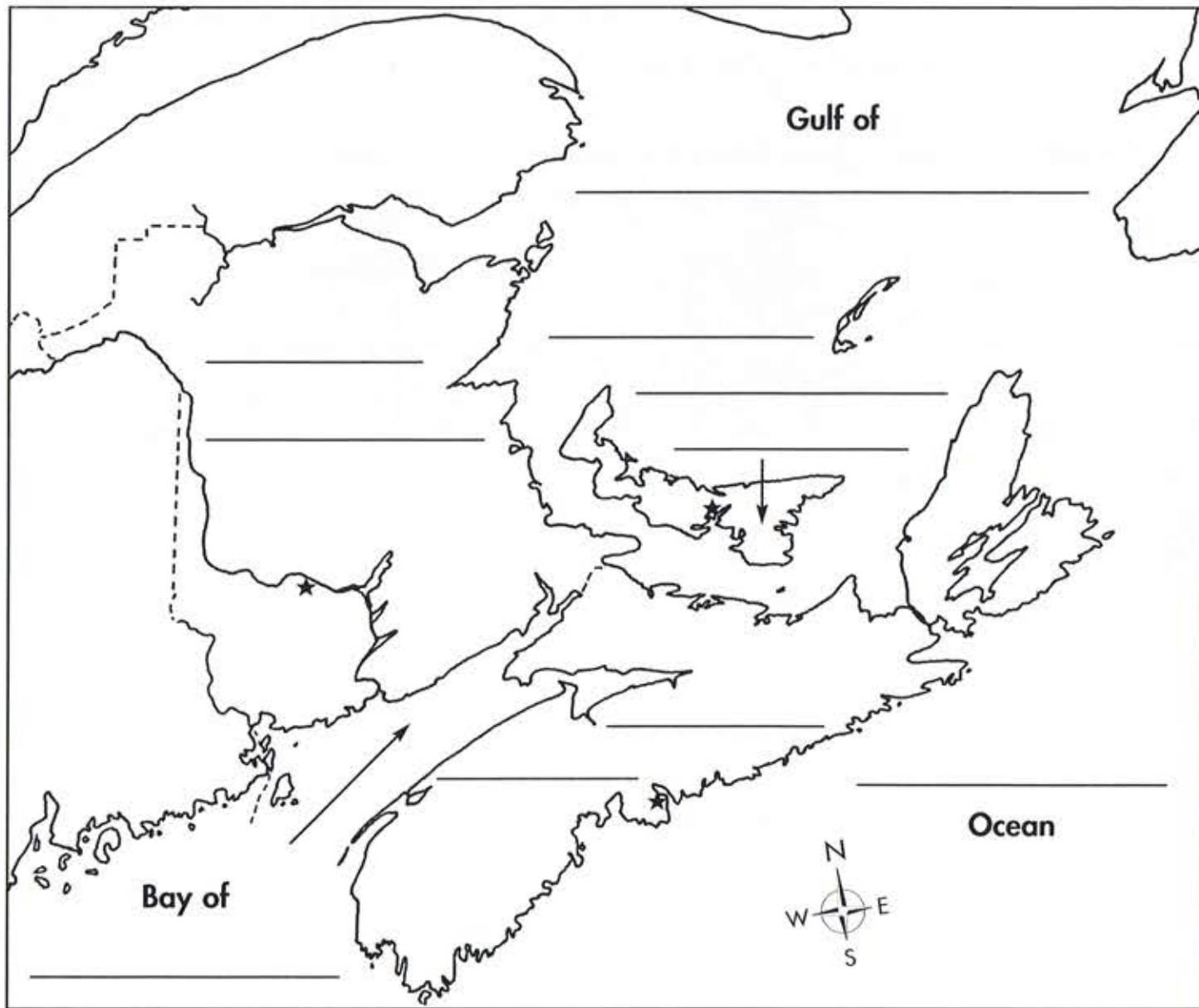
6. G \_ \_ \_ \_ IAN B \_ \_

# THE MARITIME PROVINCES

Prince Edward Island is Canada's smallest province. New Brunswick and Nova Scotia are the two other Maritime provinces. All of these provinces are beside a body of water. Maritime means beside the ocean or sea.

1. On the map, colour and name the three **Maritime provinces**. Use a different colour for each province.
2. Name the three **bodies of water** on the map.

**BONUS:** The largest urban place in the Maritimes and a provincial capital is \_\_\_\_\_.




# NEWFOUNDLAND AND QUÉBEC

The island of Newfoundland and Labrador make up Canada's most eastern province. Much of this province borders the Atlantic Ocean.

Québec is Canada's largest province. Most of the people in Québec live in the southern part, along the St. Lawrence River.

1. On the map, colour and name the **two provinces**. Use a different colour for each province.
2. Name the three **bodies of water** on the map.

**BONUS:** Using this symbol, , show on the map where most of the people in Québec live.

